

9B

End of Unit Test (Levels 3-5)

Name _____

Class _____

1 Look at the drawing of a skeleton.

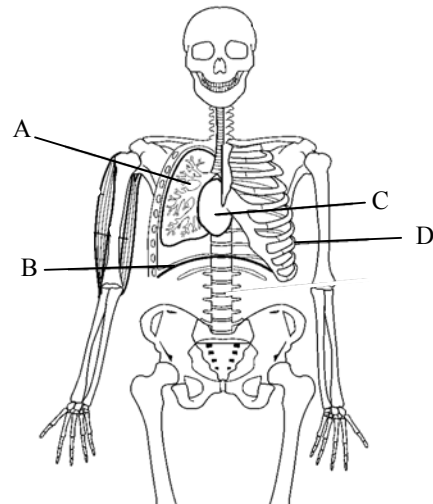
a What are the names of the parts labelled A, B, C and D?

A is _____

B is _____

C is _____

D is _____



[4 marks]

b What does organ C do?

[1 mark]

c Which system is organ C part of?

[1 mark]

9B**End of Unit Test (Levels 3-5) (continued)**

2 Read the sentences below.

Some drugs are dangerous and affect the way the body works. Other drugs are helpful to our body. Recreational drugs are drugs taken for pleasure.

a What is the name for drugs that are helpful to our body?

_____ [1 mark]

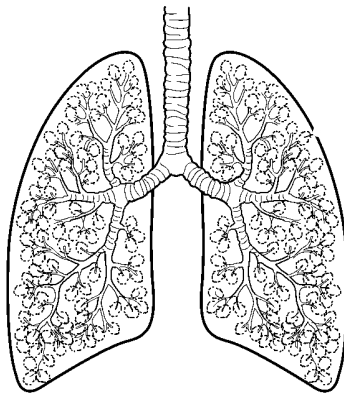
b Name one recreational drug that is legal.

_____ [1 mark]

c Name one recreational drug that is not legal.

_____ [1 mark]

3 Look at the diagram below.



a Which organ system is this organ part of? _____

_____ [1 mark]

9B**End of Unit Test (Levels 3-5) (continued)**

b What happens in this organ? _____

[1 mark]

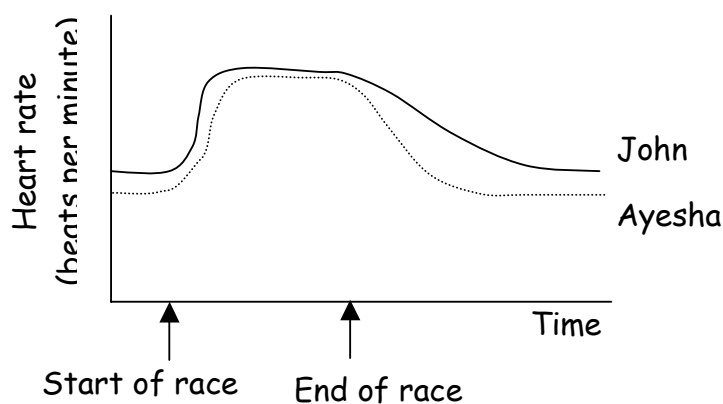
c Why does this need to happen to keep us alive? _____

[1 mark]

d Smoking is bad for the body. Give one bad effect of smoking on the body.

[1 mark]

- 4 These graphs show what happened to the heart rates of two children when they ran a race. They both finished at the same time.



a Who is the fittest? _____

[1 mark]

b Explain how you worked out your answer. _____

[1 mark]